

SIXTH GRADE
MATH WITH
CONFIDENCE

PART
B




STUDENT WORKBOOK PART B

KATE SNOW

Lesson Activities

A



$2m + 3 + m + 1$

Evaluate the expression for $m = 20$.

B

Terms and Constants

The **terms** of an expression are the parts that are added or subtracted together.

Terms without variables are called **constants**, because they stay constant and don't change.

Like terms are terms that are like each other.

- Terms with the same variable are like terms.
- Constants are like terms.

Ex. How many terms are in this expression? How many constants?

$$2m + 3 + m + 1 \qquad 2m + 3 + m + 1$$

4 terms 2 constants

Ex. Identify the like terms in this expression.

$$2m + 3 + m + 1$$

$2m$ and m both have the same variable, so they are like terms. 3 and 1 are both constants, so they are like terms.

Combine Like Terms

To simplify expressions, combine the like terms.


If two terms have the same variable, add or subtract their coefficients. (If a variable doesn't have a coefficient, we think of its coefficient as 1.)

If two terms are constants, add or subtract the constants.


Ex. Simplify the expression.

$$2m + m = 3m \qquad 2m + 3 + m + 1 \qquad 3 + 1 = 4$$

$3m + 4$



$2m + 3m$



$4m - m$



$2 + m + 3$



Four in a Row (2-Player Game)

$x + x + x$	$4x + 5$	$5x - 3x + 4$	$6x$
$x + 9$	$x + 6x$	$9x$	$2 + 3 + 4x$
$7x - 2x$	$8x$	$8x - 2x$	$2x + 4$
$7x$	$10x - x$	$2x + 1$	$x + 7 + 2$
$2x + 5 - 4$	$3x$	$x + 7x$	$5x$

Practice

Circle the expressions that are equivalent to the expression in the star.



$5a$

$3a + 2a$

$3 \cdot 2a$

$5 + a$

$a + a + a + a + a$



$3b$

$8b - 5b$

$2b + 1$

$b + b + b + b$

$4b - b$



$2y + 6$

$2y + 5 + 3$

$y + y + 3 + 3$

$2 + y + 6$

$3y - y + 6$



$4d + 10$

$5d - 2d + 10$

$3d + d + 10$

$4d + 7 + 3$

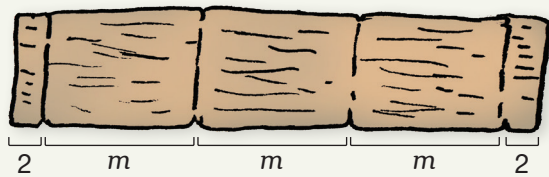
$2d + 5 + 2d + 5$

Answer the questions. Write your expressions in simplest form.

Quinn makes a rectangular banner. The banner is 20 cm wide and g cm long. Write an expression that tells the banner's perimeter.



Greg glues together 3 identical wood panels. Each panel is m inches long. Then, he adds a 2-inch border on either end. Write an expression that tells the total length.



Review 

Write the decimal equivalent for each fraction.
Then, write $<$, $>$, or $=$ in the circles.

$\frac{1}{2} = \underline{\hspace{2cm}}$

$\frac{1}{5} = \underline{\hspace{2cm}}$

$\frac{3}{5} = \underline{\hspace{2cm}}$

$\frac{1}{4} = \underline{\hspace{2cm}}$

$\frac{2}{5} = \underline{\hspace{2cm}}$

$\frac{4}{5} = \underline{\hspace{2cm}}$

$\frac{3}{4} = \underline{\hspace{2cm}}$

$1\frac{1}{2} \bigcirc 1.6$

$2\frac{1}{4} \bigcirc 2.097$

$4\frac{3}{4} \bigcirc 4.6$

$3\frac{2}{5} \bigcirc 3.517$

$5\frac{4}{5} \bigcirc 5.8$

$7\frac{3}{5} \bigcirc 7.6001$

Find the product. Write your answers in simplest form.
Convert improper fractions to mixed numbers.

$\frac{3}{15} \times \frac{5}{6} =$

$\frac{8}{2} \times \frac{6}{10} =$

$\frac{9}{8} \times \frac{8}{7} =$

Solve. Write the equations you use in the work space.

Lucy's family picks 11.7 kg of blueberries. They want to divide the blueberries into 8 equal bags to freeze. How many kilograms of blueberries should they put in each bag? Write your answer with 2 decimal digits.

Ian received the following scores at the bowling tournament.

207	225
184	238

What is the sum of his scores?

What is the average of his scores?
Write your answer with 1 decimal digit.

WORK SPACE



Unit Wrap-Up

Write a fraction that is equivalent to each percentage. Write the fractions in simplest form.

25% =

75% =

$33\frac{1}{3}\%$ =

$66\frac{2}{3}\%$ =

10% =

20% =

30% =

40% =

50% =

60% =

70% =

80% =

Convert the percentages to decimals.

37% = _____

99% = _____

10% = _____

6% = _____

Convert the fractions to percentages.

$\frac{49}{100}$ =

$\frac{3}{100}$ =

$\frac{7}{20}$ =

$\frac{8}{25}$ =

Use mental math to complete.

50% of 160 = _____

25% of 200 = _____

$33\frac{1}{3}\%$ of 900 = _____

25% of 160 = _____

75% of 200 = _____

$66\frac{2}{3}\%$ of 900 = _____

10% of 70 = _____

20% of 25 = _____

10% of 40 = _____


30% of 70 = _____

120% of 25 = _____


5% of 40 = _____

Use mental math or written equations to complete.


75% of 320



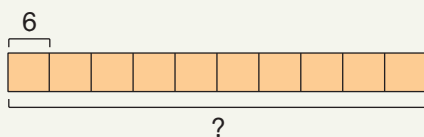
80% of 300



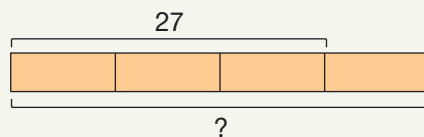
150% of 110



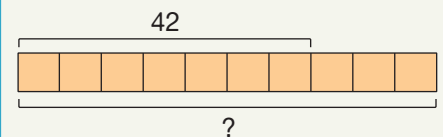
Use the bar models to complete.



10% of _____ = 6



75% of _____ = 27



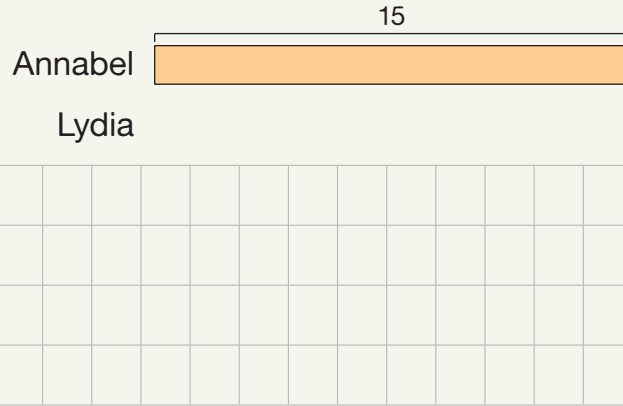
70% of _____ = 42

Unit Wrap-Up 

Use bar models to solve.


Annabel and Lydia both collect mugs. Annabel has 15 mugs. Lydia has 20% fewer mugs than Annabel. How many mugs does Lydia have?

How many more mugs does Annabel have than Lydia?



Zach and Tyler are on the swim team. At the last practice, Zach swam 60 laps. He swam 75% as many laps as Tyler. How many laps did Tyler swim?

Zach
Tyler



Stella, Brayden, and Amir are on the track team. Last week, Stella ran 50 laps. Brayden ran 90% as many laps as Stella. How many laps did Brayden run?

Stella
Brayden
Amir



Amir ran $33\frac{1}{3}\%$ more laps than Brayden. How many laps did Amir run?

Who ran the most laps?



★ Last month, Nova spent 60% of her money and saved the rest. She saved \$36. How much money did she spend?



Lesson Activities

A



Cross out 3 loose marbles on each side of the scale.

$a = \underline{\hspace{2cm}}$



Cross out 1 loose marble on each side of the scale.

$b = \underline{\hspace{2cm}}$



Cross out 4 loose marbles on each side of the scale.

$c = \underline{\hspace{2cm}}$

B


Solve Equations, Part 1

To solve an equation, we change both sides until we have the variable by itself on one side of the equation.

The two sides of an equation are like the two sides of a scale. If you change one side of the equation, you must change the other side in the same way.

1. Identify what happens to the variable in the equation. Do the opposite operation to both sides of the equation.
2. Simplify both sides.
3. Substitute the solution into the equation to check your answer.

Ex. Solve: $x + 18 = 27$



In this equation, 18 is added to x . So, we subtract 18 from both sides to get x by itself on one side of the equation.


$$\begin{array}{r} x + 18 = 27 \\ - 18 \quad - 18 \\ \hline x = 9 \end{array}$$

Check:
 $9 + 18 \stackrel{?}{=} 27$
 $27 = 27 \checkmark$



$p + 12 = 47$

Check:



$29 = n + 15$

Check:

Practice 

Solve each equation. Show all your steps. Then, substitute the solution into the equation to check that it is correct.

$$a + 3 = 15$$

Check:

$$30 = b + 1$$

Check:

$$c + 4 = 4$$

Check:

$$8 = d + 2$$

Check:

$$46 = e + 22$$

Check:

$$100 = 85 + f$$

Check:

Follow the directions.

I'm thinking of a secret number.
The sum of my number and 35 equals 50.

Write an equation to match the clue.
Use m to stand for the secret number.

Solve the equation to find the secret number. Show all your steps.

I'm thinking of a secret number.
My number increased by 47 equals 89.

Write an equation to match the clue.
Use n to stand for the secret number.

Solve the equation to find the secret number. Show all your steps.

Review

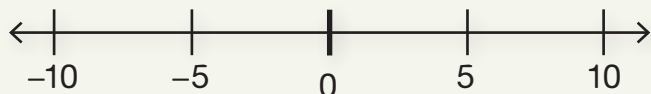


Follow the directions.

I have more than \$5 in my bank account.

Write an inequality to match the statement. Use m to stand for the amount of money.

Graph the inequality on the number line.




Circle the numbers that make the inequality true. X the numbers that do not make the inequality true.

-5
 0
 5
 10

The temperature is less than 10 degrees.

Write an inequality to match the statement. Use t to stand for the temperature.

Graph the inequality on the number line.



Circle the numbers that make the inequality true. X the numbers that do not make the inequality true.

-5
 0
 5
 10

Rewrite each division problem as a multiplication problem and solve. Write your answers in simplest form. Convert improper fractions to whole numbers or mixed numbers.


$$3 \div \frac{1}{4} =$$

$$3 \div \frac{3}{4} =$$

$$3 \div 1\frac{1}{4} =$$

Use mental math to complete the chart.


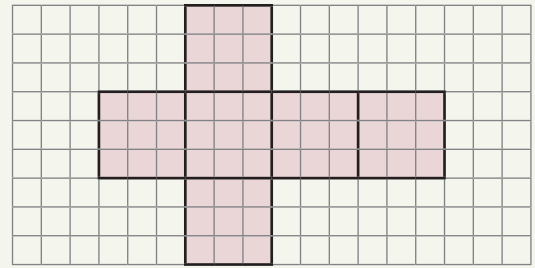

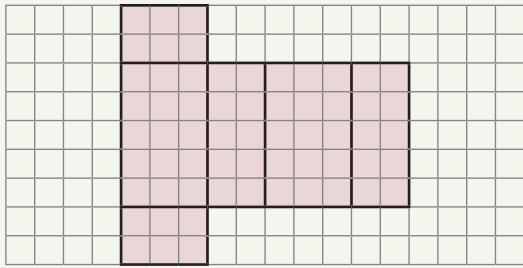
- 16 children play the guitar.
- 25% more children play the piano than play the guitar.
- 50% fewer children play the drums than play the piano.
- 20% fewer children play the clarinet than play the drums.




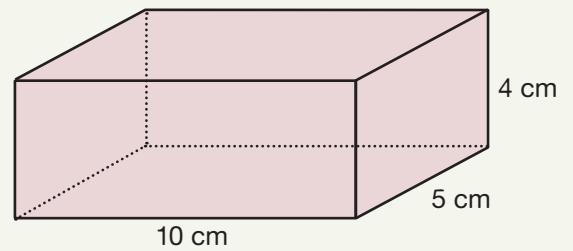

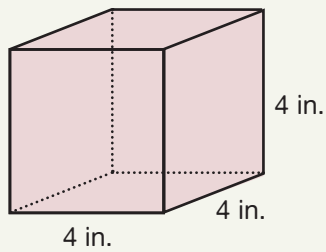
Instrument	Number of Children
Guitar	
Piano	
Drums	
Clarinet	

Practice 

Use the net to find the surface area of the matching 3-D solid. Each small square represents 1 cm.²


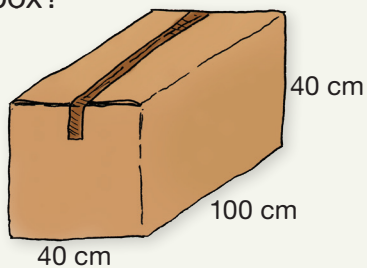


Find the surface area of each solid.





Solve. Write the equations you use.

What is the surface area of the cardboard box?



Willow builds this closed box out of wood. What is the surface area of the box?



Review

Solve each equation. Show all your steps. Then, substitute the solution into the equation to check that it is correct.

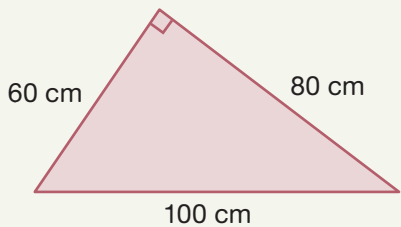
$$125 = s + 46$$

Check:

$$8t = 72$$

Check:

Find the area. Write the equations you use.



Area: _____ sq. cm

Evaluate.

$$2^4 = \underline{\hspace{2cm}}$$

$$7^2 = \underline{\hspace{2cm}}$$

$$4^3 = \underline{\hspace{2cm}}$$

$$1^9 = \underline{\hspace{2cm}}$$

$$34^1 = \underline{\hspace{2cm}}$$

$$10^4 = \underline{\hspace{2cm}}$$


$$7 \times 10^3 = \underline{\hspace{2cm}}$$

$$2^3 \times 10^2 = \underline{\hspace{2cm}}$$

$$5^2 \times 10^6 = \underline{\hspace{2cm}}$$

Solve. Write the equations you use.

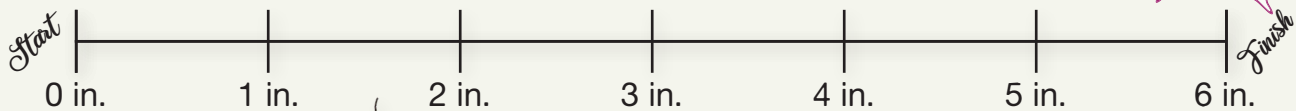
What is the volume of the aquarium in cubic feet?




Myles pours water into the aquarium until the water is 8 inches high. What is the volume of the water in cubic feet?

Lesson Activities 

A




The ladybug travels 6 inches in 6 seconds.




_____ inches per second

The snail travels 6 inches in 12 seconds.



_____ inches per second

The ant travels 6 inches in 3 seconds.



_____ inches per second

B

Speed

Speed is a special type of unit rate that compares distance to one unit of time.

$$\frac{\text{distance}}{\text{time}} = \text{speed}$$

Measurement units for speed always include both a distance unit and a time unit. We sometimes use p to stand for “per” in measurement units for speed.

miles per hour
miles/hour
mph

Ex. James is training for a marathon. On Sunday, he ran 12 miles. It took him 2 hours. What was his speed (in miles per hour)?

$$\frac{12 \text{ miles}}{2 \text{ hours}} = \mathbf{6 \text{ miles per hour}}$$

Ex. On Monday, James ran 10 miles. It took him $1\frac{1}{2}$ hours. What was his speed (in miles per hour)?

$$\frac{10 \text{ miles}}{1\frac{1}{2} \text{ hours}} \rightarrow 10 \div 1\frac{1}{2}$$

$$\frac{10}{1} \div \frac{3}{2} \rightarrow \frac{10}{1} \times \frac{2}{3} = \frac{20}{3} = \mathbf{6\frac{2}{3} \text{ mph}}$$

Running Log

	Distance (mi.)	Time (hr.)	Speed (mph)
Tuesday	18	3	
Wednesday	19	3	
Thursday	21	$4\frac{2}{3}$	
Saturday	10	$1\frac{1}{4}$	

Practice

Circle the speeds that are equivalent to the speed in the box.

40
miles
per hour

$$\frac{80 \text{ mi.}}{2 \text{ hr.}}$$

$$\frac{60 \text{ mi.}}{3 \text{ hr.}}$$

$$\frac{120 \text{ mi.}}{3 \text{ hr.}}$$

$$\frac{40 \text{ mi.}}{1 \text{ hr.}}$$

$$\frac{40 \text{ km}}{1 \text{ hr.}}$$

30
kilometers
per hour

$$\frac{10 \text{ km}}{2 \text{ hr.}}$$

$$\frac{90 \text{ km}}{3 \text{ hr.}}$$

$$\frac{300 \text{ km}}{10 \text{ hr.}}$$

$$\frac{60 \text{ km}}{2 \text{ hr.}}$$

$$\frac{60 \text{ km}}{2 \text{ min.}}$$

10
feet per
second

$$\frac{50 \text{ ft.}}{5 \text{ sec.}}$$

$$\frac{80 \text{ ft.}}{10 \text{ sec.}}$$

$$\frac{20 \text{ mi.}}{2 \text{ hr.}}$$

$$\frac{40 \text{ ft.}}{4 \text{ sec.}}$$

$$\frac{100 \text{ ft.}}{10 \text{ sec.}}$$

Jennie made a chart of her bike rides. Use the chart to find her speed for each ride. Write your answers as whole numbers or mixed numbers in simplest form.

Day	Distance (km)	Time (hr.)	Speed (km/hr.)
Saturday	48	3	
Monday	35	$2\frac{1}{2}$	
Wednesday	27	2	
Friday	60	5	



Solve. Write the equations you use.

The Olympic sprinter runs 100 meters in 10 seconds. What is the sprinter's speed in meters per second?



The cheetah runs 24 meters in 2 seconds. What is its speed in meters per second?

Which is faster, the cheetah or the sprinter?



Lesson Activities

A

$$53\% = \frac{53}{100} = \underline{0.53}$$

$$9\% = \frac{\quad}{100} = \underline{\quad}$$

$$176\% = \frac{\quad}{100} = \underline{\quad}$$

$$70\% = \frac{\quad}{100} = \underline{\quad}$$

$$41\% = \frac{\quad}{100} = \underline{\quad}$$

$$208\% = \frac{\quad}{100} = \underline{\quad}$$

B

Use Decimal Multiplication to Find Percentages

In math, “of” often means multiply. We can use decimals to find a percentage of a number.

1. Convert the percentage to a decimal.
2. Multiply the decimal by the number.

Ex. Faith buys a board game for \$38. She lives in a state that charges 6% sales tax. How much is the sales tax on the board game?

What is 6% of 38?

$$6\% = 0.06$$

$$\begin{array}{r} 4 \\ 38 \\ \times 0.06 \\ \hline \$2.28 \end{array}$$

Decimal digits
0
+ 2
2




Ex. What is the total cost of the game?
\$38.00 + \$2.28 = **\$40.28**

C

Pop the Percentage (1-Player Game)

53% of \$60



6% of \$80

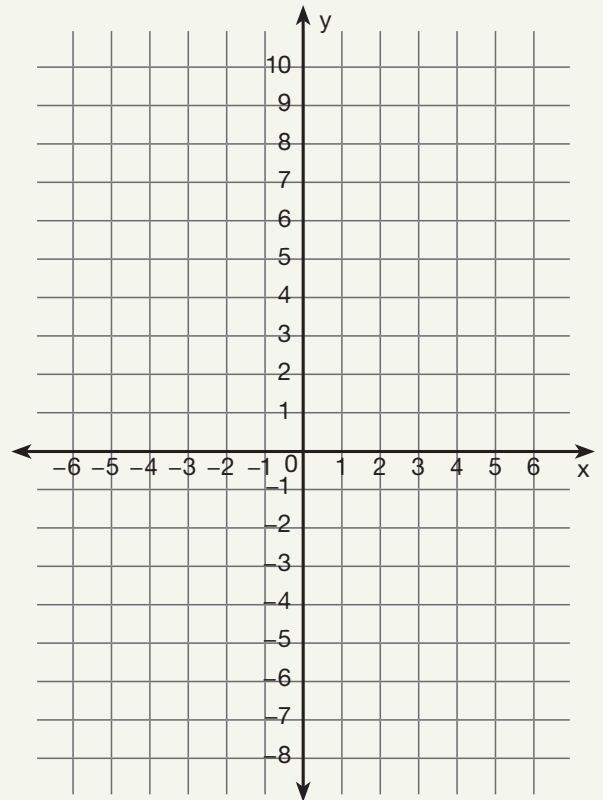
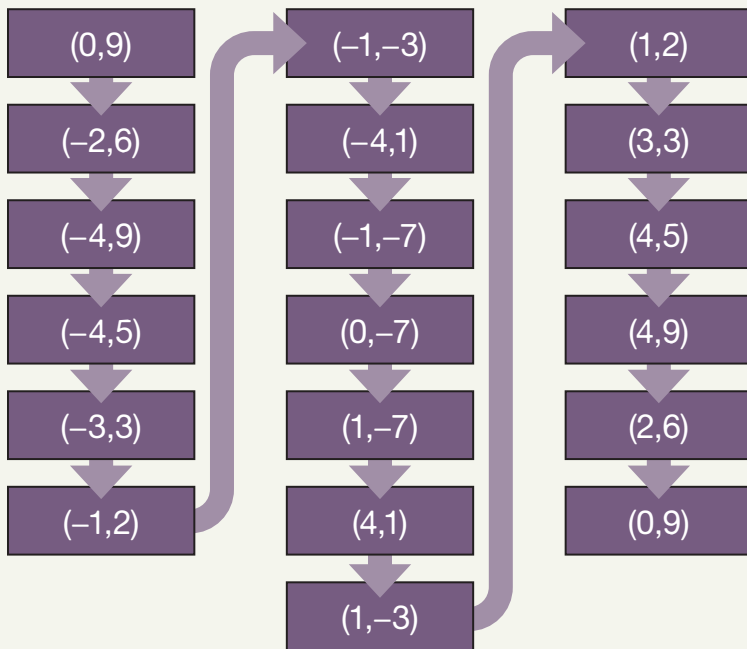


176% of \$20



Review 

Plot the points. Then, connect the points in order with straight lines to create a shape.



Use mental math to solve.

$0.7 + \underline{\hspace{2cm}} = 1$

$1.6 + \underline{\hspace{2cm}} = 2$

$6.5 + \underline{\hspace{2cm}} = 10$

$0.28 + \underline{\hspace{2cm}} = 1$

$1.49 + \underline{\hspace{2cm}} = 2$

$4.25 + \underline{\hspace{2cm}} = 10$

$0.997 + \underline{\hspace{2cm}} = 1$

$1.005 + \underline{\hspace{2cm}} = 2$

$9.875 + \underline{\hspace{2cm}} = 10$

Complete the chart. Use mental math or write your equations in the work space.

Speed (miles per hour)	Time (hours)	Distance (miles)
60	3	
40	2	
	5	100
	6	60
50		200
40		200

